

1.6

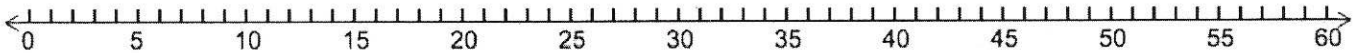
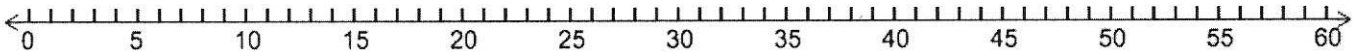
Least Common Multiple – List Method

Name _____ Period _____

Step 1: List multiples of the numbers in the boxes. Step 2: Skip count the multiples on the number line. The LCM is where the multiples first meet.

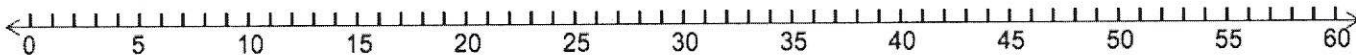
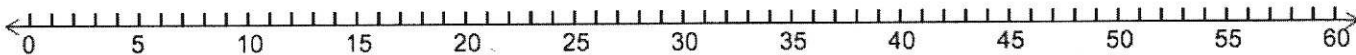
1.

8:
10:



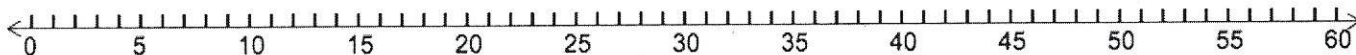
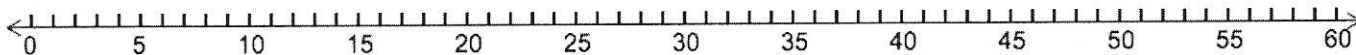
2.

9:
12:



3.

6:
20:



4.

16:
24:

