


10.2 Histogram Assignment

Name _____ Period _____

Display the data in a histogram.


1.

Goals Scored	
Goals	Frequency
0–2	6
3–5	8
6–8	2
9–11	1




2.

Height Jumped	
Inches	Frequency
0–11	7
12–23	10
24–35	5
36–47	2



3.

Money Spent	
Dollars	Frequency
0–19	3
20–39	8
40–59	8
60–79	15



4. The histogram shows the times students ran the mile in gym class.

- Which interval contains the fewest data values?
- How many students are in the class?
- What percent of students ran the mile in 12 minutes or less?

