

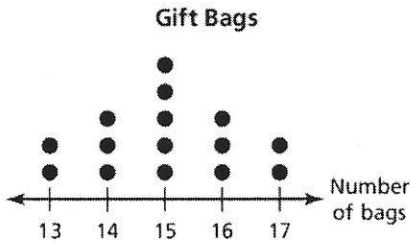
# 10.3

## Shapes of Distribution Practice

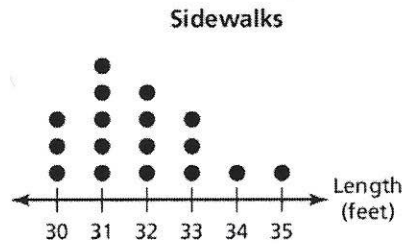
Name \_\_\_\_\_ Date \_\_\_\_\_

Describe the shape of each distribution.

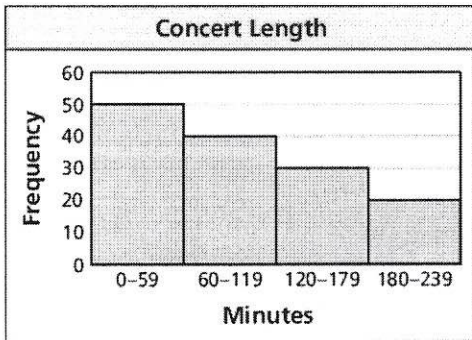
1.



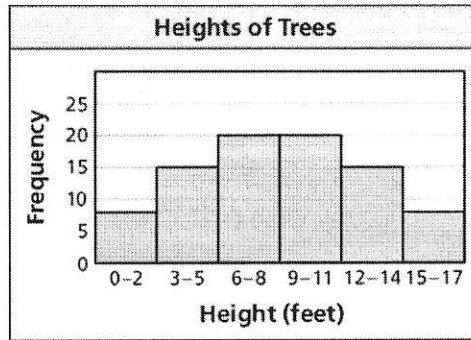
2.



3.



4.



5. The frequency table shows the number of months each person has been a member of a golf league. Display the data in a histogram. Describe the shape of the distribution.

<b>Months as a Member</b>	0-4	5-9	10-14	15-19	20-24	25-29	30-34
<b>Frequency</b>	4	6	8	10	12	12	8