

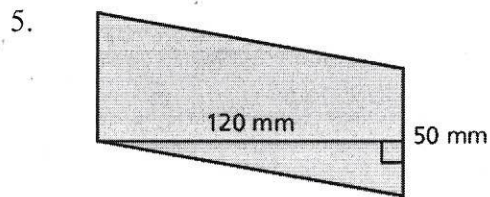
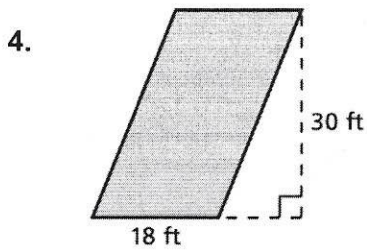
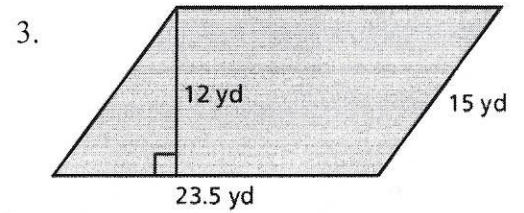
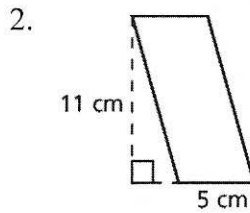
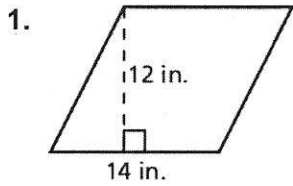
4.1

Practice

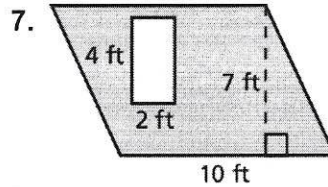
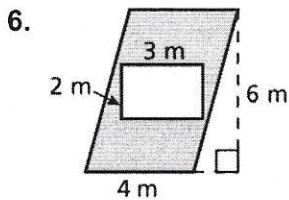
For use after Lesson 4.1

Name _____ Date _____

Find the area of the parallelogram.



Find the area of the shaded region.



8. A stained glass window has an area of 900 square inches.
- One window design is made of rectangular stained glass pieces that are 5 inches by 3 inches. How many stained glass pieces are used in the window?
 - Another window design is made of square stained glass pieces that are 6 inches by 6 inches. How many stained glass pieces are used in the window?