

4.2

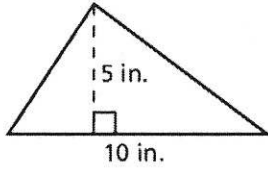
Practice

For use after Lesson 4.2

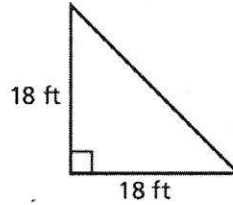
Name _____ Period _____

Find the area of the triangle.

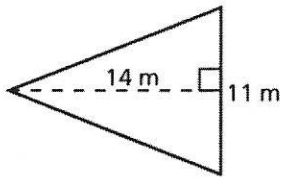
1.



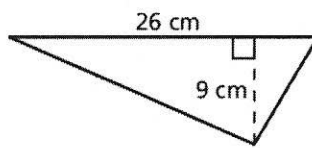
2.



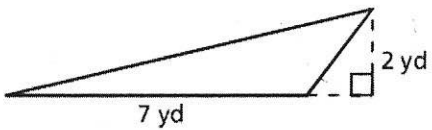
3.



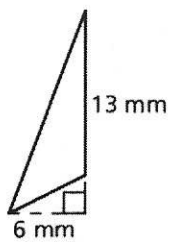
4.



5.



6.



7. A triangular bookend has a base of 4 inches and a height of 8 inches. Find the area of the bookend.