


4.3

Area of Trapezoids Assignment

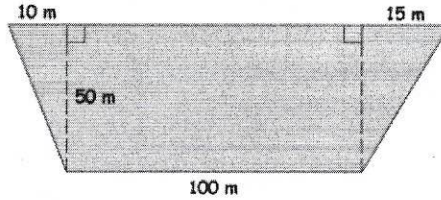
Name _____ Period _____

Find the area of the trapezoid.


1.




2.



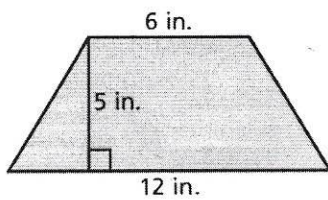
3.



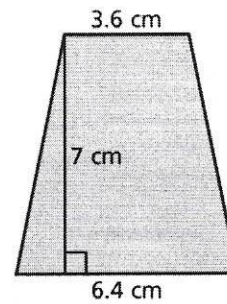
4.



5.



6.



Bonus

7. The triangle and the trapezoid have the same area. What is the length of the triangle?

