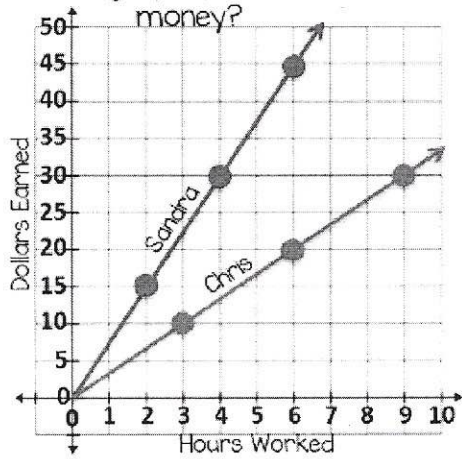


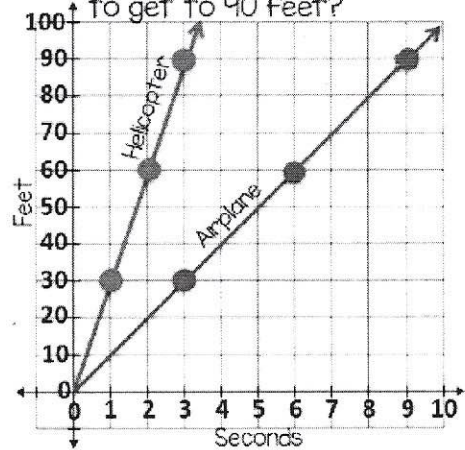
Chris and Sandra both got summer jobs. Based on the graphs, who earned more money?

7



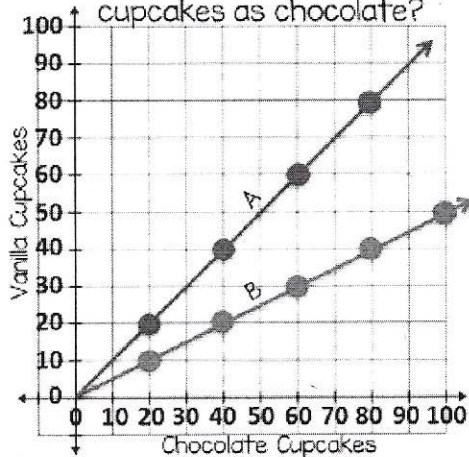
A helicopter and an airplane both took off from an airport. Which took longer to get to 90 feet?

8



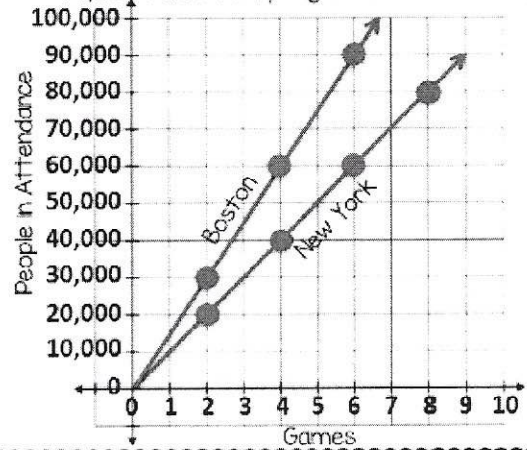
Companies A & B make cupcakes. Which company makes half as many vanilla cupcakes as chocolate?

9



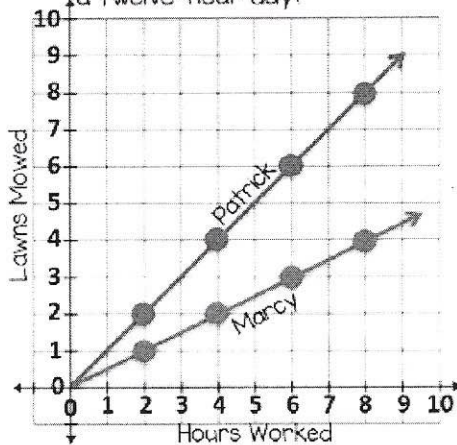
Two baseball teams wanted to see who could have better attendance. Which team got to 60,000 Fans in only 4 games?

10



Patrick and Marcy both got summer jobs. Based on the graphs, who could mow 10 lawns in a twelve-hour day?

11



Two animals hauled goods across the desert. Which animal took longer to traverse 100 miles?

12

