

6.2**Practice**

Name _____ Period _____

Complete the statement using < or >.

1. 0 _____ 9

2. 8 _____ -3

3. -5 _____ -7

4. -12 _____ 0

5. -6 _____ -2

6. -21 _____ -40

Order the integers from least to greatest.

7. $1, -3, -6, 5, 0$

8. $2, -4, -9, 3, 1$

9. $11, -11, 18, -18, -8$

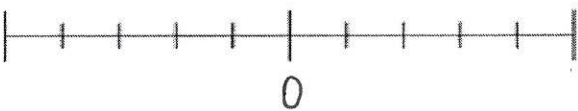
10. $21, -14, -35, 28, -7$

11. Your miniature golf scores for the first half of a course are $-3, 7, -2, -5, 3, 1, 0, 4, -4$.


Order the scores from least to greatest.

Number the number lines.

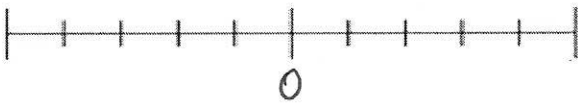
Count by 2's



Count by 3's



Count by 5's



Count by 10's

