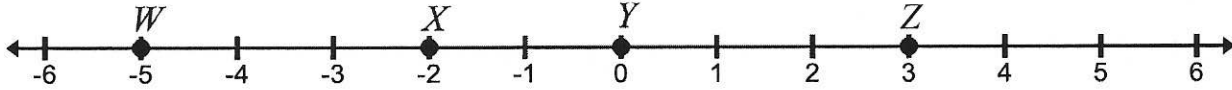
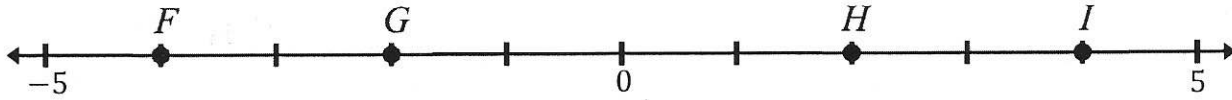


17. Determine the values of W , X , Y , and Z on the number line shown below.



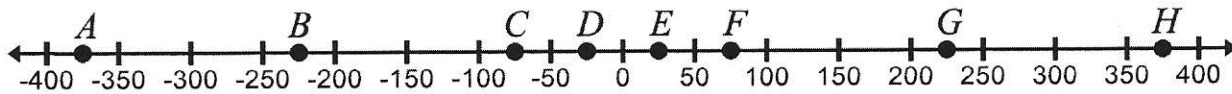
W : _____ X : _____ Y : _____ Z : _____

18. Determine the values of F , G , H , and I on the number line shown below.



F : _____ G : _____ H : _____ I : _____

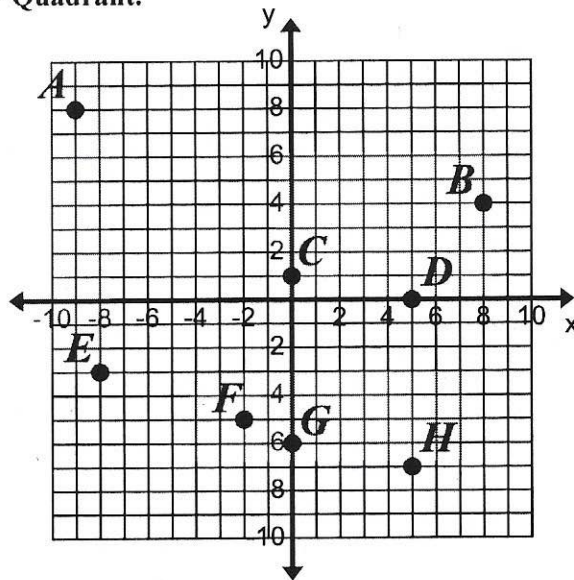
19. Determine the values of A , B , C , D , E , F , G , and H on the number line shown below.



A : _____ B : _____ C : _____ D : _____
 E : _____ F : _____ G : _____ H : _____

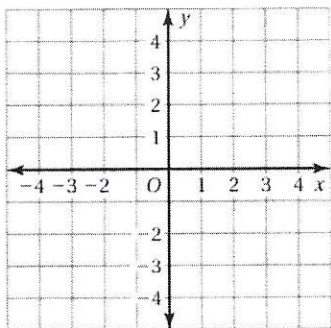
20. Write the ordered pair for points $A - H$ and their Quadrant.

A : _____ Quad _____
 B : _____ Quad _____
 C : _____ Quad _____
 D : _____ Quad _____
 E : _____ Quad _____
 F : _____ Quad _____
 G : _____ Quad _____
 H : _____ Quad _____



Reflect the point in (a) the x -axis and (b) the y -axis.

21. $(-4, 2)$



22.

$(-5, -3)$

