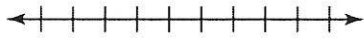
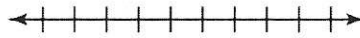


16. $8k \leq 64$




17. $c + 19 < 23$

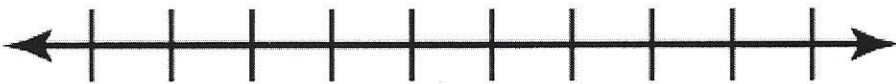


Write and graph an inequality for the following word problems.

18. A person must be at least 16 years old to get a Utah driver's license.




19. The number of hours a full-time employee can work a week without getting overtime pay is at most 40 hours.



20. In order to ride the Triple Threat Roller Coaster, a rider must be at least 42 inches tall.



21. There are no more than 896 students at Lava Ridge.



Write the inequality.

16. _____

See graph

17. _____

See graph

18. _____

19. _____

20. _____

21. _____